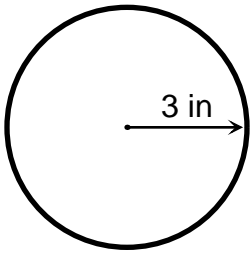


Answer Key

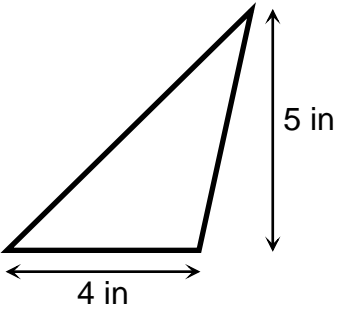
Find the area.



$$\text{Area} = 3.14 \times (3 \text{ in})^2$$

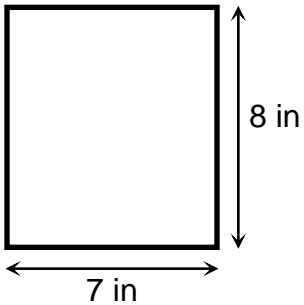
$$\text{Area} = 3.14 \times 9 \text{ sq. in}$$

$$\text{Area} = 28.26 \text{ sq. in}$$



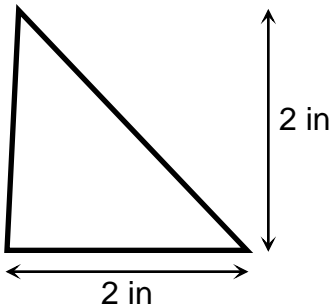
$$\text{Area} = (4 \text{ in} \times 5 \text{ in}) / 2$$

$$\text{Area} = 10 \text{ sq. in}$$



$$\text{Area} = 7 \text{ in} \times 8 \text{ in}$$

$$\text{Area} = 56 \text{ sq. in}$$



$$\text{Area} = (2 \text{ in} \times 2 \text{ in}) / 2$$

$$\text{Area} = 2 \text{ sq. in}$$