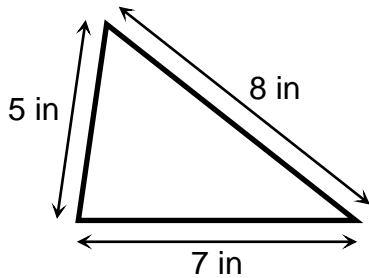




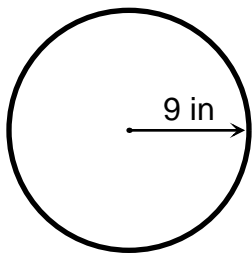
# Answer Key

Find the perimeter or circumference.




$$\text{perimeter} = 7 \text{ in} + 8 \text{ in} + 5 \text{ in}$$

$$\text{perimeter} = 20 \text{ in}$$



$$\text{circumference} = 2 \times 3.14 \times 9 \text{ in}$$

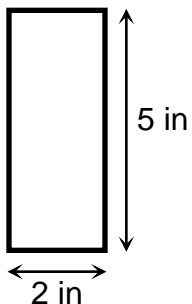
$$\text{circumference} = 56.52 \text{ in}$$



$$\text{perimeter} = 2 \times 2 \text{ in} + 2 \times 8 \text{ in}$$

$$\text{perimeter} = 4 \text{ in} + 16 \text{ in}$$

$$\text{perimeter} = 20 \text{ in}$$



$$\text{perimeter} = 2 \times 2 \text{ in} + 2 \times 5 \text{ in}$$

$$\text{perimeter} = 4 \text{ in} + 10 \text{ in}$$

$$\text{perimeter} = 14 \text{ in}$$